




# MINHA ATIVIDADE




NOME: \_\_\_\_\_

DATA: \_\_\_\_ / \_\_\_\_ / \_\_\_\_





Tudo Sala de Aula



## HORA DA PESCARIA!



1 HÁ QUANTOS PEIXINHOS NA ÁGUA?



2 ESSE TOTAL É PAR OU ÍMPAR?



3 SE 2 PEIXINHOS FOSSEM PESCADOS, QUANTOS SOBRARIAM NA ÁGUA?  
PINTE A QUANTIDADE CORRETA.

