

MINHA ATIVIDADE

NOME: _____

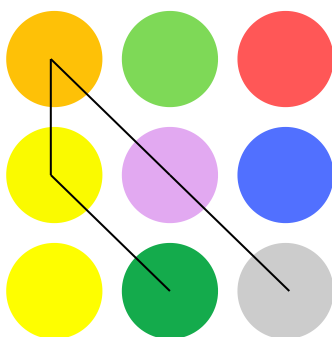
DATA: ____/____/____




1. LIGUE OS PONTOS SEGUINDO A SEQUÊNCIA NUMÉRICA E DESCUBRA QUAL CAMINHO SERÁ FORMADO. SIGA O EXEMPLO.




8 4 1 5 9




7 5 6 2 1




2 6 9 8 5




4 2 6 8 7




3 5 7 4 9




9 5 1 2 3



3 9 8 1 5



6 9 1 2 4



9 5 3 2 6

