


MINHA ATIVIDADE


NOME: _____
DATA: ____/____/____




1. LIGUE OS NÚMEROS ÀS QUANTIDADES CORRETAS.



1



2



3



2. PINTE OS CONJUNTOS DE FIGURAS QUE POSSUEM SOMENTE 5 ELEMENTOS.

