


MINHA ATIVIDADE

NOME: _____





DATA: ____/____/____



1. COMPLETE AS CONCHAS DO FUNDO DO MAR COM OS NÚMEROS QUE ESTÃO FALTANDO.



2. CONTE OS HAMBÚRGUERES DE SIRI EM CADA BANDEJA E ESCREVA A QUANTIDADE.



3. PINTA 2 DAS ESPÁTULAS QUE O BOB ESPONJA UTILIZA PARA FAZER OS HAMBÚRGUERES DE SIRI.

